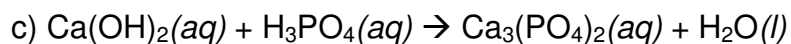
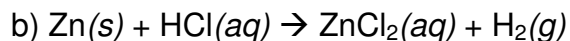
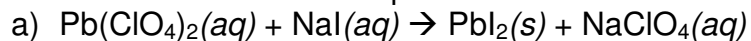


25. Write balanced net ionic equations for each reaction.



26. Identify the precipitate formed when solutions of these ionic compounds are mixed.

Write a net ionic equation.



27. Write a complete ionic equation and a net ionic equation for the reaction of aqueous solutions of iron (III) nitrate and sodium hydroxide.

28. Write a balanced net ionic equation for each reaction.

a)

b)

c)

d)

31. Identify the precipitate formed when solutions of these ionic compounds are mixed.

